

1^{ère} année

Mardi 9 juin 2020

- Le son [oi] : - rappel p.57 du manuel + lecture rapide (20)
- exercices p.46 et 47 ("grand mou,,")

- l'écriture des sons [ou] et [oi] au cahier point bleu
+ mots

→ ou (1 ligne)

loup (3x)

chou (2x)

fourmi (2x)

souris (2x)

→ oi (1 ligne)

trois (3x)

devoir (2x)

toit (3x)


histoire (1x)

- Les nombres 12 et 14 : additions et soustractions
(voir feuilles)

- Les formes géométriques : manipulations en ateliers

20

Lecture rapide



loi, moi, toi,
moi, foi, soi,
roi, choi

① $\begin{matrix} br \\ tr \\ nr \end{matrix} \begin{matrix} / \\ / \\ / \end{matrix} \begin{matrix} oi \\ oi \\ oi \end{matrix}$ $\begin{matrix} fr \\ pl \\ bl \end{matrix} \begin{matrix} / \\ / \\ / \end{matrix} \begin{matrix} oi \\ oi \\ oi \end{matrix}$ $\begin{matrix} dr \\ fl \\ pr \end{matrix} \begin{matrix} / \\ / \\ / \end{matrix} \begin{matrix} oi \\ oi \\ oi \end{matrix}$

② un mouchoir, une passoire, trois

③ un petit pois, un miroir, des noisettes

④ la voiture, il boit, le roi

⑤ un tiroir, un devoir, il aperçoit

⑥ Benoît lit une histoire drôle.

⑦ La voisine roule à vélo tous les soirs.

⑧ Le garagiste répare notre voiture.

Les nombres 12 et 14 : additions et soustractions



Observe les dessins pour faire des calculs.

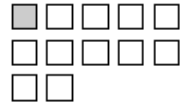


$$4 + 8 = 12$$

$$8 + 4 = 12$$

$$12 - 4 = \dots$$

$$12 - \dots = \dots$$




$$\dots + \dots = 12$$

$$\dots + \dots = 12$$

$$12 - \dots = \dots$$

$$12 - \dots = \dots$$

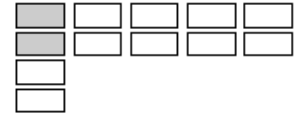


$$\dots + \dots = 12$$

$$\dots + \dots = 12$$

$$12 - \dots = \dots$$

$$12 - \dots = \dots$$



$$\dots + \dots = 12$$

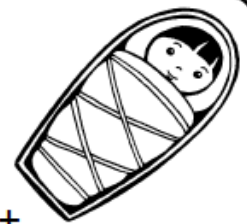
$$\dots + \dots = 12$$

$$12 - \dots = \dots$$

$$12 - \dots = \dots$$



Calcule.

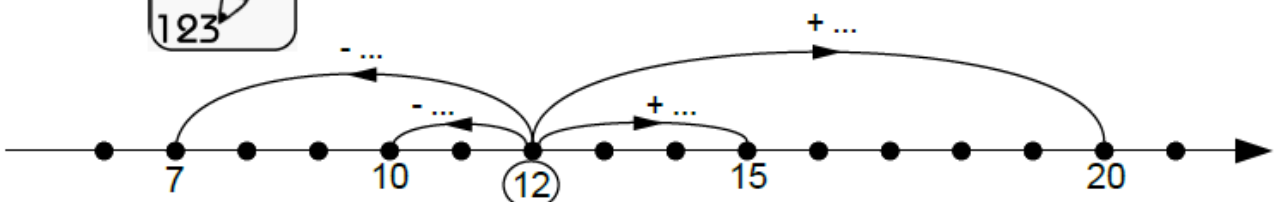


$8 + 4 = \dots$	$3 + 3 = \dots$	$12 = 1 + \dots$	$12 = 4 + \dots$
$7 + 5 = \dots$	$6 + 6 = \dots$	$12 = 6 + \dots$	$12 = 8 + \dots$
$10 + 2 = \dots$	$3 + 9 = \dots$	$12 = 9 + \dots$	$12 = 5 + \dots$
$5 + 7 = \dots$	$4 + 8 = \dots$	$12 = 3 + \dots$	$12 = 10 + \dots$

$12 - 8 = \dots$	$12 - 5 = \dots$	$12 - \dots = 1$	$9 = 12 - \dots$
$12 - 2 = \dots$	$12 - 10 = \dots$	$12 - \dots = 4$	$2 = 12 - \dots$
$12 - 6 = \dots$	$12 - 7 = \dots$	$12 - \dots = 8$	$7 = 12 - \dots$
$12 - 9 = \dots$	$12 - 1 = \dots$	$12 - \dots = 10$	$5 = 12 - \dots$



Complète les flèches.





Observe les dessins pour faire des calculs.



$$4 + 10 = 14$$

$$10 + 4 = 14$$

$$14 - 4 = \dots$$

$$14 - \dots = \dots$$

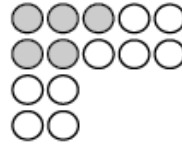


$$\dots + \dots = 14$$

$$\dots + \dots = 14$$

$$14 - \dots = \dots$$

$$14 - \dots = \dots$$

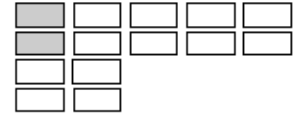


$$\dots + \dots = 14$$

$$\dots + \dots = 14$$

$$14 - \dots = \dots$$

$$14 - \dots = \dots$$



$$\dots + \dots = 14$$

$$\dots + \dots = 14$$

$$14 - \dots = \dots$$

$$14 - \dots = \dots$$



Calcule.

$9 + 4 = \dots$	$3 + 3 = \dots$	$14 = 1 + \dots$	$14 = 4 + \dots$
$8 + 5 = \dots$	$6 + 6 = \dots$	$14 = 6 + \dots$	$14 = 8 + \dots$
$10 + 4 = \dots$	$3 + 9 = \dots$	$14 = 9 + \dots$	$14 = 5 + \dots$
$5 + 7 = \dots$	$6 + 8 = \dots$	$14 = 3 + \dots$	$14 = 10 + \dots$

$14 - 8 = \dots$	$14 - 5 = \dots$	$14 - \dots = 1$	$9 = 14 - \dots$
$14 - 2 = \dots$	$14 - 10 = \dots$	$14 - \dots = 4$	$2 = 14 - \dots$
$14 - 6 = \dots$	$14 - 7 = \dots$	$14 - \dots = 8$	$7 = 14 - \dots$
$14 - 9 = \dots$	$14 - 1 = \dots$	$14 - \dots = 10$	$5 = 14 - \dots$



Complète les flèches.

